




Nombre: _____




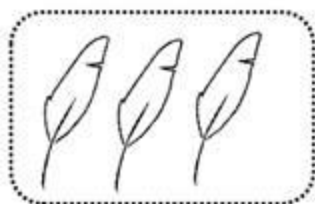
Sumas



$4+1=$



$2+2=$



$3+2=$



$2+5=$




$4+2=$



Nombre: _____



Sumas



$6 + 2 =$




$3 + 7 =$



$5 + 4 =$



$8 + 1 =$



$9 + 0 =$


Nombre: _____



Sumas





$6+4=$



$2+8=$



$5+1=$



$7+2=$



$1+1=$

Nombre: _____



Sumas

$$\square + \square = \square$$

$$\square + \square = \square$$

$$\square + \square = \square$$

$$\square + \square = \square$$

$$\square + \square = \square$$