



EXAM 2_2 (Functions 1)

Name:.....

(2 points each)

1. A toy rocket is launched from a platform that is 16 feet above the ground. The height, h , in feet, of the rocket x seconds after launch is given by the formula $h(x) = -16x^2 + 126x + 16$. Draw the graph and work out:

- The height of the rocket 2 seconds after launching.
- The maximum height the rocket reaches.
- After how many seconds is the rocket 114 feet above the ground?
- When will the rocket hit the ground?

2. Solve by substitution and graphically the simultaneous equations:

$$\left. \begin{array}{l} x^2 + 16 = y + 10x \\ x - y = 2 \end{array} \right\} \text{ (Remember: Do not use data table!)}$$

3. Find the domain of the following functions:

$$f(x) = x^3 - 2x + 7 \qquad g(x) = \sqrt{2x + 5} \qquad h(x) = \frac{x + 1}{x^2 - 10x + 16}$$

4. A function is given as: $f(x) = \begin{cases} x^2 & x < 0 \\ 3 & 0 < x < 2 \\ 2x - 1 & x \geq 2 \end{cases}$

- Find $f(-2)$, $f(0)$, $f(1)$, $f(2)$, $f(3)$
- Sketch the function
- What are its domain and range?
- Intervals of increase
- Continuity

5. Given the equation of the parabola: $f(x) = -x^2 + 2x - 5$

- Find its vertex, axis of symmetry, its intersections with the x axis and the y axis, and draw its graph.
- Domain and Range

SOLUTION

1. A toy rocket is launched from a platform that is 16 feet above the ground. The height, h , in feet, of the rocket x seconds after launch is given by the formula $h(x) = -16x^2 + 126x + 16$. Draw the graph and work out:

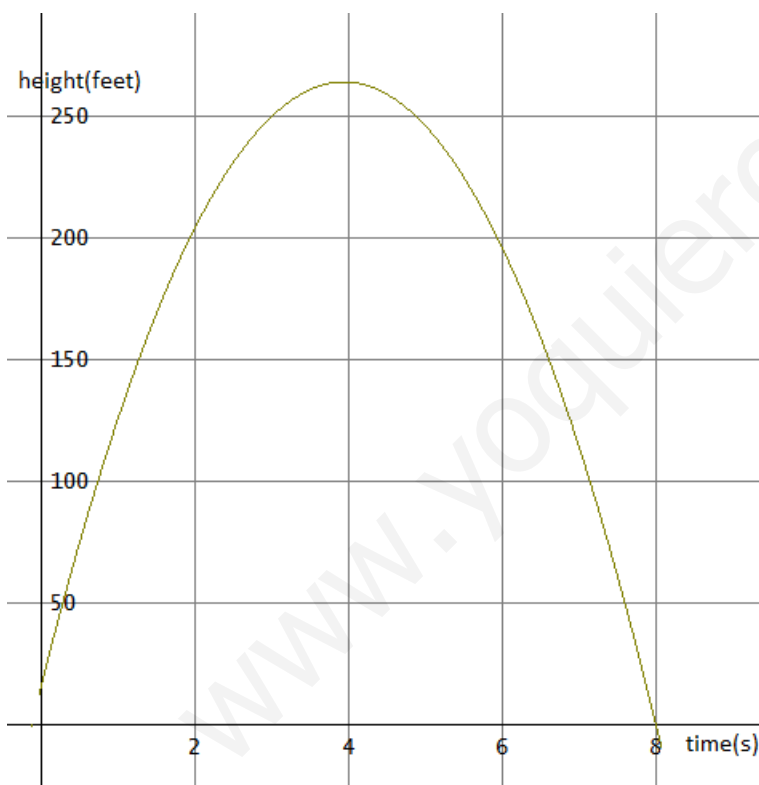
- The height of the rocket 2 seconds after launching.
- The maximum height the rocket reaches.
- After how many seconds is the rocket 114 feet above the ground?
- When will the rocket hit the ground?

It is a parabola, open downward

$$\text{Vertex } x = -\frac{126}{-32} = 3.9375 \rightarrow y = 264.0625 \rightarrow V(3.9375, 264.0625)$$

x and y intercepts: $x = 0 \rightarrow y = 16$

$$y = 0 \rightarrow -16x^2 + 126x + 16 = 0 \rightarrow x = \frac{-126 \pm \sqrt{16900}}{-32} = \frac{-126 \pm 130}{-32} = \begin{cases} -\frac{1}{8} \text{ no (time)} \\ 8 \end{cases}$$



- $h(2) = -16 \cdot 2^2 + 126 \cdot 2 + 16$
 $h(2) = 204$ feet, 2 seconds after launch
- Maximum height (in the vertex)
264.0625 feet

$$c) y = 114 \rightarrow -16x^2 + 126x + 16 = 114 \rightarrow -16x^2 + 126x - 98 = 0$$

$$x = \frac{-126 \pm \sqrt{126^2 - 6272}}{-32} = \frac{-126 \pm \sqrt{9604}}{-32} = \frac{-126 \pm 98}{-32} \begin{cases} 0.875 \\ 7 \end{cases}$$

After 0.875 seconds and after 7 seconds the rocket is 114 feet above the ground

d) The rocket hit the ground in the x -intercepts, 8 second after launch.

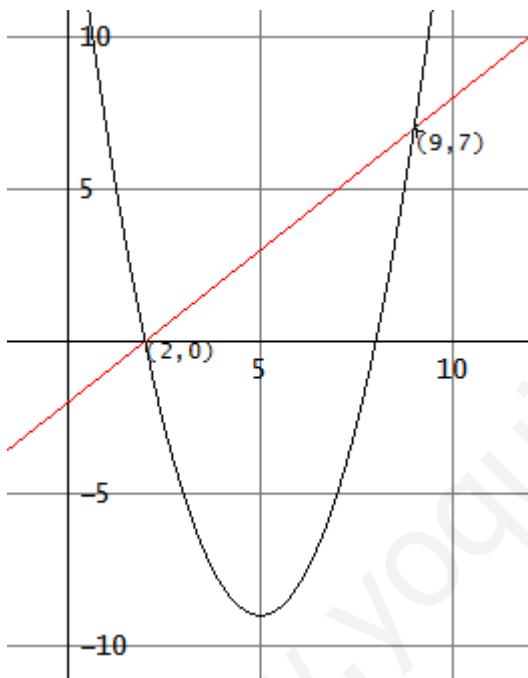
2. Solve by substitution and graphically the simultaneous equations:

$$\left. \begin{array}{l} x^2 + 16 = y + 10x \\ x - y = 2 \end{array} \right\} \rightarrow y = x - 2 \rightarrow x^2 + 16 = x - 2 + 10x \rightarrow x^2 - 11x + 18 = 0$$

$$x = \frac{11 \pm \sqrt{121 - 72}}{2} = \frac{11 \pm 7}{2} = \begin{cases} 9 \rightarrow y = 9 - 2 = 7 \\ 2 \rightarrow y = 2 - 2 = 0 \end{cases} \rightarrow \text{SOL} \begin{cases} x = 9, y = 7 \\ x = 2, y = 0 \end{cases}$$

Graphically:

$$\left. \begin{array}{l} y = x^2 - 10x + 16 \\ y = x - 2 \end{array} \right\} \rightarrow \begin{array}{l} \text{Vertex } x = \frac{10}{2} = 5 \rightarrow y = -9 \\ \text{slope} = 1, y\text{-intercepts } -2 \end{array} \left. \begin{array}{l} \rightarrow \text{Upwards U} \\ \rightarrow (0, -2) \end{array} \right\}$$



x- intercepts (parabola)

$$x^2 - 10x + 16 = 0$$

$$x = \frac{10 \pm \sqrt{100 - 64}}{2} = \frac{10 \pm 6}{2} = \begin{cases} 8 \rightarrow (8, 0) \\ 2 \rightarrow (2, 0) \end{cases}$$

y- intercepts (parabola)

$$x = 0 \rightarrow y = 16 \rightarrow (0, 16)$$

3. Find the domain of the following functions:

$$f(x) = x^3 - 2x + 7 \rightarrow D(f) = \mathbb{R}$$

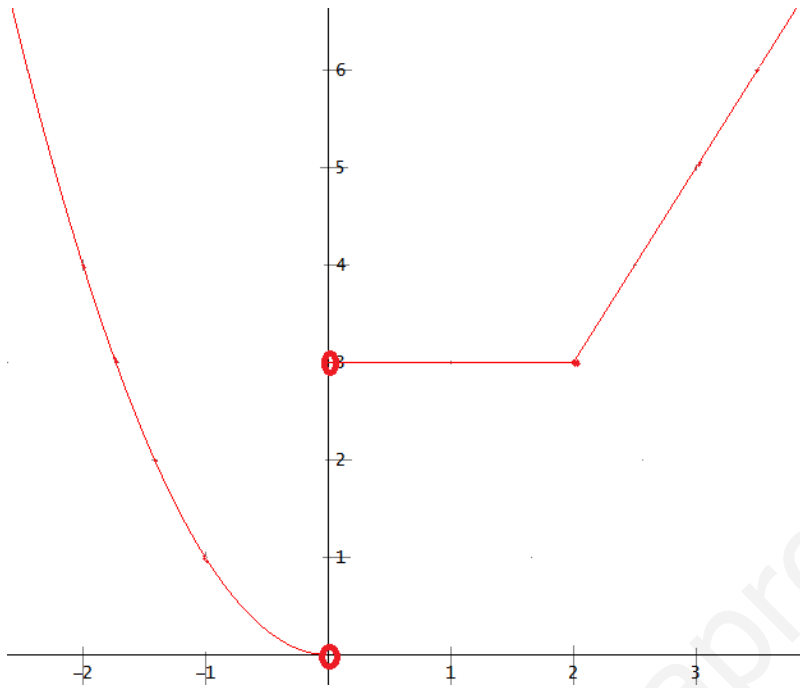
$$g(x) = \sqrt{2x + 5} \rightarrow 2x + 5 \geq 0 \rightarrow x \geq -\frac{5}{2} \Rightarrow D(g) = \left[-\frac{5}{2}, +\infty\right)$$

$$h(x) = \frac{x + 1}{x^2 - 10x + 16} \rightarrow x^2 - 10x + 16 = 0 \rightarrow \begin{cases} x = 8 \\ x = 2 \end{cases} \Rightarrow D(h) = \mathbb{R} - \{2, 8\}$$

4. A function is given as: $f(x) = \begin{cases} x^2 & x < 0 \\ 3 & 0 < x < 2 \\ 2x - 1 & x \geq 2 \end{cases}$

a) $f(-2) = 4$, $f(0)$ It does not exist, $f(1) = 3$, $f(2) = 3$, $f(3) = 5$

b) Sketch the function



c) What are its domain and range?

$$D = (-\infty, 0) \cup (0, +\infty)$$

$$R = (0, +\infty)$$

d) Intervals of increase:

Increasing $(2, +\infty)$,

Decreasing $(-\infty, 0)$,

Constant $(0, 2)$

e) Continuity: $f(x)$ is continuous in

$$(-\infty, 0) \cup (0, +\infty)$$

The point $x = 0$ is a jump discontinuity

5. $f(x) = -x^2 + 2x - 5$ It is a parabola, open downward

a) Vertex $x = -\frac{2}{-2} = 1 \rightarrow y = -1^2 + 2 - 5 = -4 \rightarrow V(1, -4)$

Axis of symmetry $x = 1$, intersections with the x axis and the y axis:

x- intercepts $-x^2 + 2x - 5 = 0$

$$x = \frac{-2 \pm \sqrt{4 - 20}}{-2} = \frac{2 \pm \sqrt{-16}}{-2} = \text{NO}$$

y- intercepts

$$x = 0 \rightarrow y = -5 \rightarrow (0, -5)$$

Another point (we need it)

$$\text{if } x = 3 \rightarrow y = -8 \rightarrow (3, -8)$$

b) Domain and Range

$$D = (-\infty, +\infty)$$

$$R = (-\infty, -4]$$

