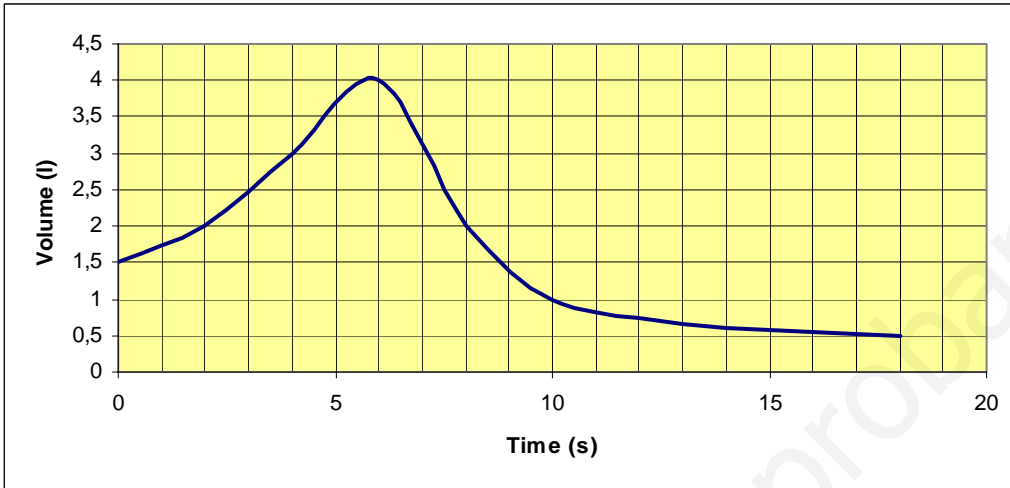


## FUNCTIONS

1. You can measure lung capacity by inhaling as much air as you can and exhaling it forcefully into a device called spirometer.

This graph shows the volume of air that is moved in and out of your lungs. (2 points)



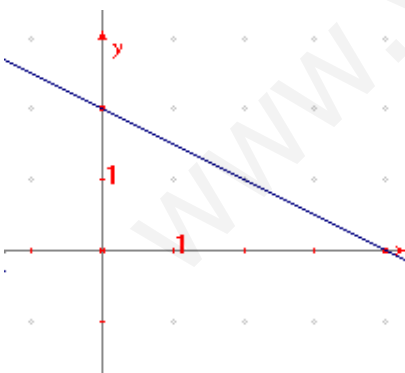
- What was the volume at first?
- How long did the observation take?
- What's this person's maximum capacity?
- What was the volume ten seconds after the test started? And when it finished?

2. Graph the line that contains the given information and find the equations. (2 points)

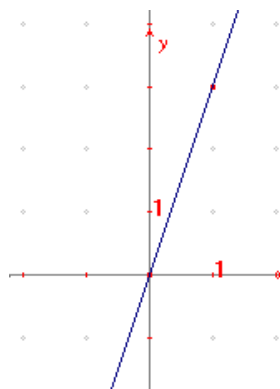
- Slope = -3 Point (1,-3)
- Slope = 1/2 Point (2,1)

3. Find the equation of the lines given by their graphs: (2.5 points)

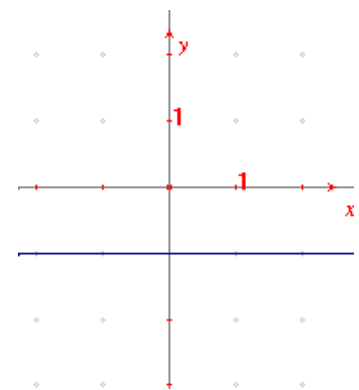
a)



b)



c)



4. Use the two points to find the equation of the line that goes through them both. (2 p)

- (2, -1) (3, 1)
- (6, 1), (4, -1)

5. There is an initial enrolment fee of €30 and a monthly fee of €120 for an evening classes Maths course.

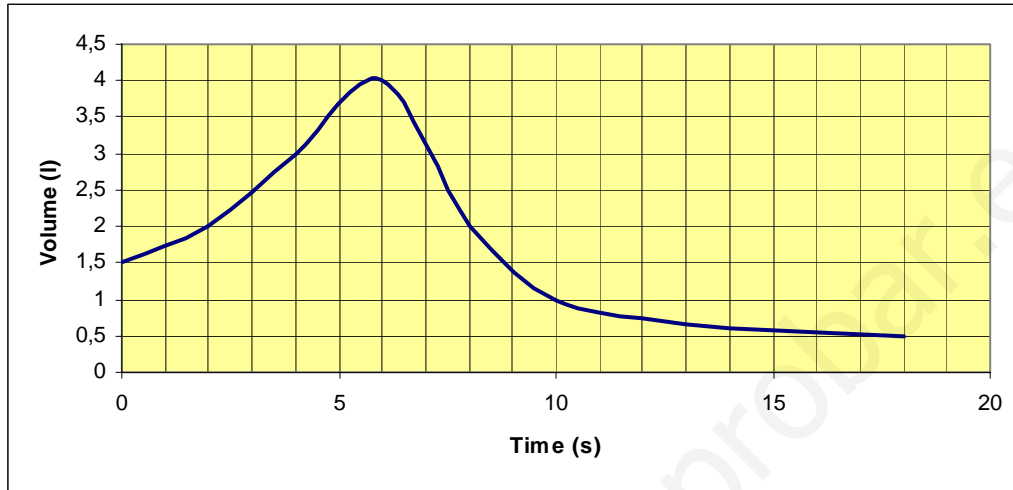
- Find the formula for the function: number of months → cost
- Draw the function graph.

(1.5 points)

**SOLUTION**

1. You can measure lung capacity by inhaling as much air as you can and exhaling it forcefully into a device called spirometer.

This graph shows the volume of air that is moved in and out of your lungs.

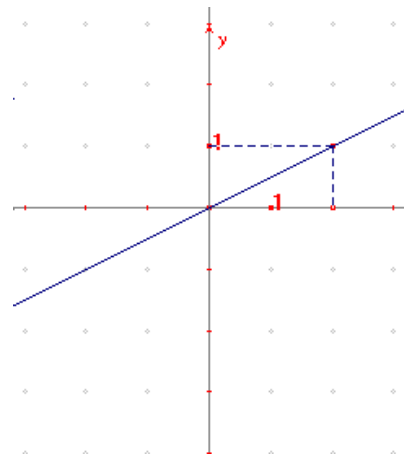
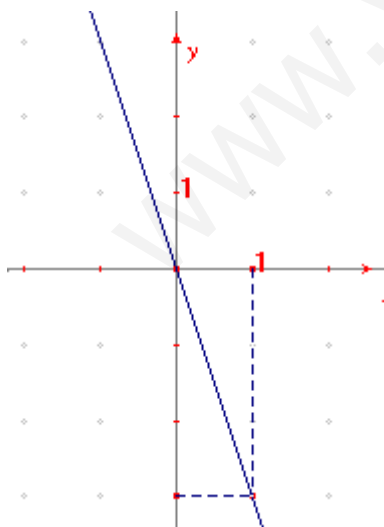


- a) What was the volume at first? 1.5 litres
- b) How long did the observation take? 18 seconds
- c) What's this person's maximum capacity? The maximum capacity is 4 litres
- d) What was the volume ten seconds after the test started? And when it finished? Ten seconds after the test started the volume was 1 litre. When it finished the volume was 0.5 litres.

2. Graph the line that contains the given information and find the equations.

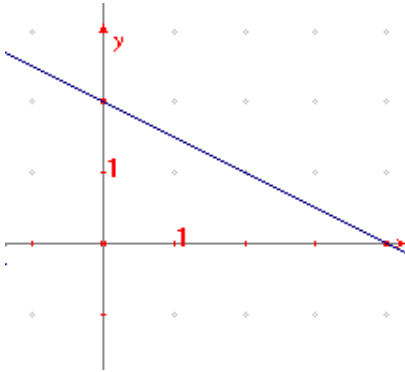
a) Slope = -3 Point (1,-3)

b) Slope = 1/2 Point (2,1)



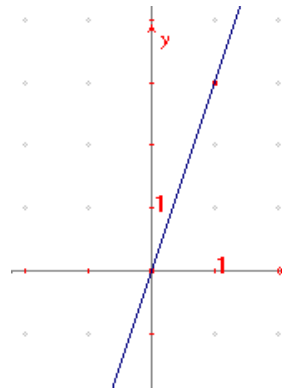
3. Find the equation of the lines given by their graphs:

a)



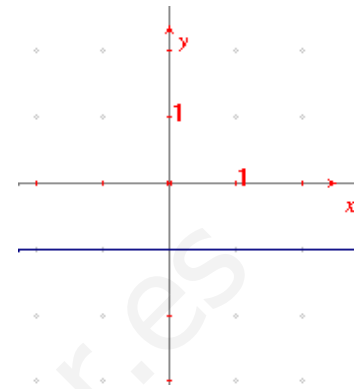
$$y = -\frac{1}{2}x + 2$$

b)



$$y = 3x$$

c)



$$y = -1$$

4. Use the two points to find the equation of the line that goes through them both.

a) (2, -1) (3, 1)

$$m = \frac{y_1 - y_0}{x_1 - x_0} = \frac{1 - (-1)}{3 - 2} = 2$$

$$y = m(x - x_0) + y_0 \rightarrow y = 2(x - 2) - 1$$

$$y = 2x - 4 - 1 \Rightarrow y = 2x - 5$$

b) (6, 1), (4, -1)

$$m = \frac{y_1 - y_0}{x_1 - x_0} = \frac{-1 - 1}{4 - 6} = 1$$

$$y = m(x - x_0) + y_0 \rightarrow y = 1(x - 6) + 1$$

$$y = x - 6 + 1 \Rightarrow y = x - 5$$

5. There is an initial enrolment fee of €30 and a monthly fee of €120 for an evening classes Maths course.

a) Find the formula for the function: number of months  $\rightarrow$  cost

months	1	2	3	4
cost	150	270	390	510

$$y = 30 + 150x$$

b) Draw the function graph.

