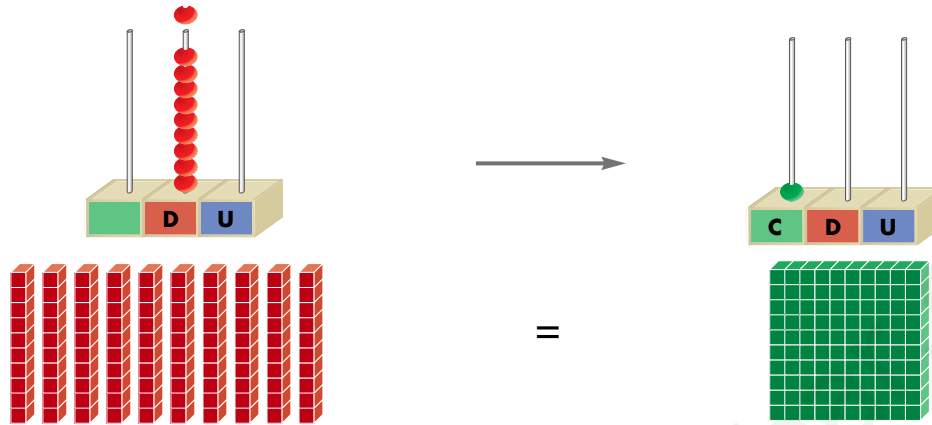


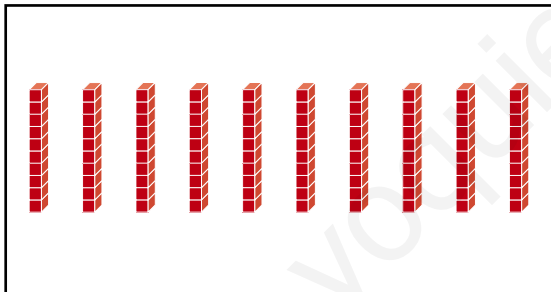
La centena


Aprende.



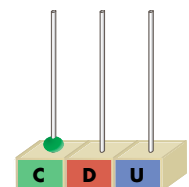
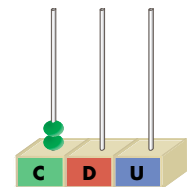
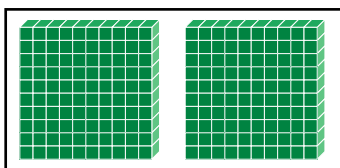

1 centena = 10 decenas = 100 unidades
1 C = 10 D = 100 U

Agrupar de 10 en 10 y escribir cuántas centenas son.







Relaciona.



Agrupar de 10 en 10 y escribir cuántas decenas son.

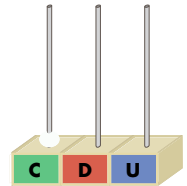
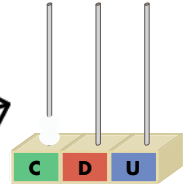
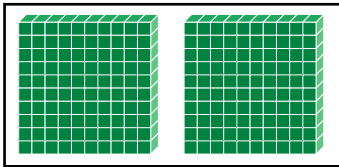



10 decenas



20 decenas

Relaciona.



www.yoquieroaprobar.es

Observa y completa.

	C	D	U	
	1	0	0	cien
	1	0	1	ciento uno
				<input type="text"/>
				<input type="text"/>
				<input type="text"/>
				<input type="text"/>
				<input type="text"/>
				<input type="text"/>
				<input type="text"/>
				<input type="text"/>

Observa y completa.

	C	D	U	
	1	0	0	cien
	1	0	1	ciento uno
	1	0	2	ciento dos
	1	0	3	ciento tres
				ciento cuatro
				ciento cinco
				ciento seis
				ciento siete
				ciento ocho
				ciento nueve