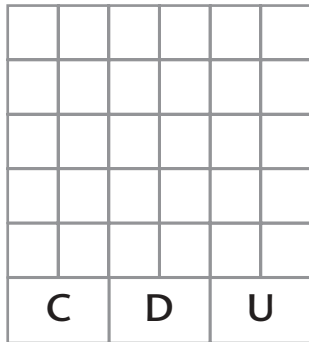
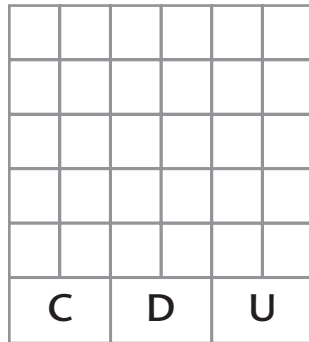


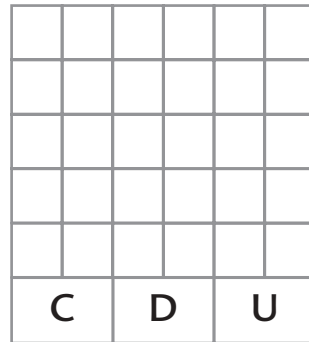
- 1 Lee los números y represéntalos, coloreando de azul las unidades, de rojo las decenas y de verde las centenas.



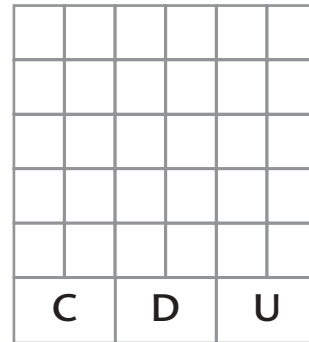
511



571









549



568

- 2 Ordena los números que están en los globos de mayor a menor.



>  >  >  >  >

- 3 Completa realizando las operaciones que se indican.

$$12 \xrightarrow{-3} \bigcirc \xrightarrow{+4} \bigcirc \xrightarrow{-5} \bigcirc \xrightarrow{+6} \bigcirc$$

$$12 \xrightarrow{-1} \bigcirc \xrightarrow{-2} \bigcirc \xrightarrow{+3} \bigcirc \xrightarrow{+5} \bigcirc$$

**1** Colorea para representar estos números.

C	D	U			

seiscientos veinte

C	D	U			

seiscientos treinta

C	D	U			

seiscientos setenta

**2** Completa con los signos > o <.

190		380
-----	--	-----

310		510
-----	--	-----

450		540
-----	--	-----

300		400
-----	--	-----

510		150
-----	--	-----

305		503
-----	--	-----

500		400
-----	--	-----

650		520
-----	--	-----

450		405
-----	--	-----

500		300
-----	--	-----

650		560
-----	--	-----

335		573
-----	--	-----

**3** Calcula los resultados de estas operaciones.

<table border="1"> <tr><td>D</td><td>U</td></tr> <tr><td>5</td><td>2</td></tr> </table> $\begin{array}{r} - 29 \\ \hline \square \end{array}$	D	U	5	2	→	<table border="1"> <tr><td>D</td><td>U</td></tr> <tr><td></td><td></td></tr> </table> $\begin{array}{r} - 29 \\ \hline \square \end{array}$	D	U				<table border="1"> <tr><td>D</td><td>U</td></tr> <tr><td>6</td><td>2</td></tr> </table> $\begin{array}{r} - 29 \\ \hline \square \end{array}$	D	U	6	2	→	<table border="1"> <tr><td>D</td><td>U</td></tr> <tr><td></td><td></td></tr> </table> $\begin{array}{r} - \phantom{29} \\ \hline \square \end{array}$	D	U		
D	U																					
5	2																					
D	U																					
D	U																					
6	2																					
D	U																					