

Números a la carta


1

Primaria


Ficha 1	Números hasta el 9	2	Ficha 17	Números hasta el 39. Series	18
Ficha 2	Sumas con números hasta el 9	3	Ficha 18	Escritura de números hasta el 39	19
Ficha 3	Descomposición de números hasta el 9	4	Ficha 19	Sumas sin llevar, con números hasta el 39	20
Ficha 4	Series y orden de números hasta el 9	5	Ficha 20	Números hasta el 69. Descomposición y series	21
Ficha 5	Restas con números hasta el 9	6	Ficha 21	Escritura de números del 40 al 59	22
Ficha 6	Números del 10 al 19	7	Ficha 22	Restas sin llevar con números hasta el 69	23
Ficha 7	Sumas con números hasta el 10	8	Ficha 23	Números hasta el 99. Series	24
Ficha 8	Series y orden de números hasta el 19	9	Ficha 24	Escritura de números del 70 al 89	25
Ficha 9	Sumas con números hasta el 19 (2 sumandos)	10	Ficha 25	Números hasta el 99. Escritura	26
Ficha 10	Sumas con números hasta el 19 (3 sumandos)	11	Ficha 26	Sumas y restas sin llevar, con números hasta el 99	27
Ficha 11	Restas hasta el 9, contando	12	Ficha 27	Comparación y ordenación de números	28
Ficha 12	Restas con números hasta el 19 ..	13	Ficha 28	Sumas de 3 números sin llevar	29
Ficha 13	Lectura y escritura de números hasta el 19	14	Ficha 29	Sumas de 2 números llevando	30
Ficha 14	Las decenas: series, lectura y escritura	15	Ficha 30	Sumas de 3 números llevando	31
Ficha 15	Suma y resta de decenas	16	Ficha 31	Sumas llevando y restas sin llevar	32
Ficha 16	Números hasta el 29. Series y descomposición	17			

Nombre _____ Fecha _____

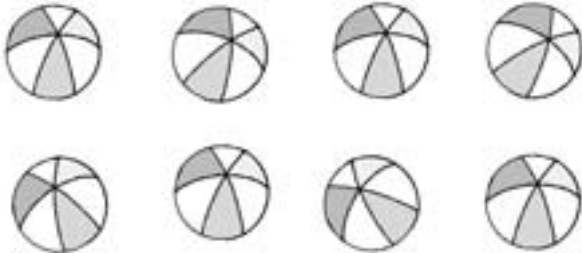
• Cuenta y rodea el número.



3 5 7




2 4 6




6 7 8



1 4 8



3 6 9



5 6 7

• Completa.

0 ▶ 1 ▶ 2 ▶ ▶ ▶ ▶ ▶ ▶ ▶ 9


9 ▶ 8 ▶ 7 ▶ ▶ ▶ ▶ ▶ ▶ ▶ 0

Nombre _____ Fecha _____

- Escribe los números y suma.



$$2 + 1 = \boxed{3}$$



$$\underline{\quad} + \underline{\quad} = \boxed{\quad}$$



$$\underline{\quad} + \underline{\quad} = \boxed{\quad}$$




$$\underline{\quad} + \underline{\quad} = \boxed{\quad}$$

- Dibuja y suma.


$$3 + 2 = \boxed{\quad}$$




$$3 + 3 = \boxed{\quad}$$



$$4 + 2 = \boxed{\quad}$$



$$6 + 2 = \boxed{\quad}$$



Nombre _____ Fecha _____

● **Observa y completa.**

	$4 + 5 = 9$
--	-------------

	$\underline{\quad} + \underline{\quad} = \square$
--	---

	$\underline{\quad} + \underline{\quad} = \square$
--	---

	$\underline{\quad} + \underline{\quad} = \square$
--	---

	$\underline{\quad} + \underline{\quad} = \square$
--	---

	$3 + \underline{\quad} = \square$
--	-----------------------------------

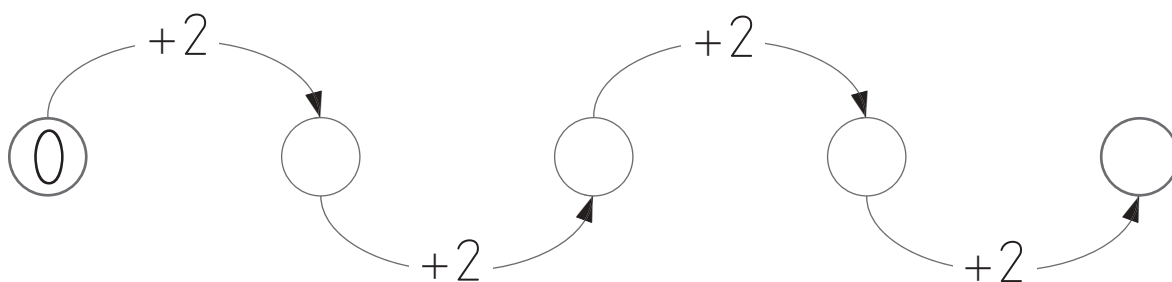
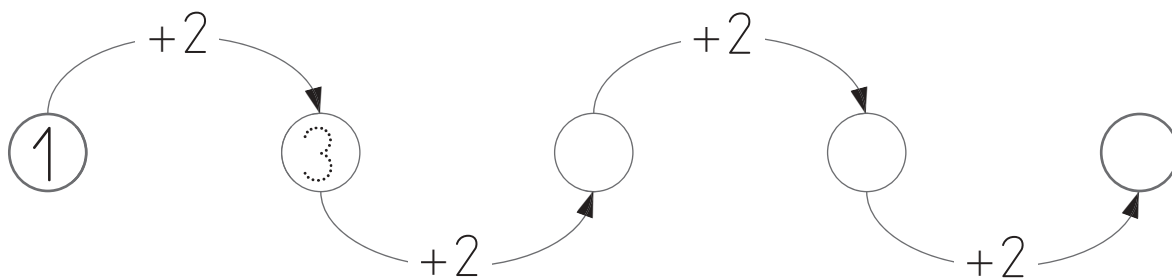
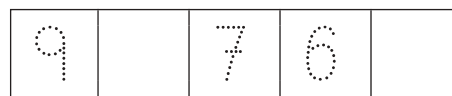

	$\underline{\quad} + \underline{\quad} = \square$
--	---

	$\underline{\quad} + \underline{\quad} = \square$
--	---

	$\underline{\quad} + \underline{\quad} = \square$
--	---


	$\underline{\quad} + \underline{\quad} = \square$
--	---

Nombre _____ Fecha _____

● **Completa.**● **Completa.**● **Escribe los números que faltan.**

Nombre _____ Fecha _____


● **Completa.**



$$5 - 3 = \boxed{2}$$



$$\underline{\quad} - \underline{\quad} = \boxed{\quad}$$



$$\underline{\quad} - \underline{\quad} = \boxed{\quad}$$



$$\underline{\quad} - \underline{\quad} = \boxed{\quad}$$




$$\underline{\quad} - \underline{\quad} = \boxed{\quad}$$



$$\underline{\quad} - \underline{\quad} = \boxed{\quad}$$



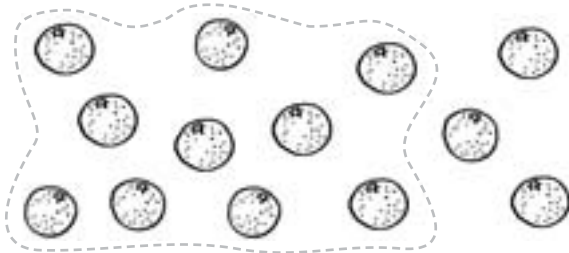
$$\underline{\quad} - \underline{\quad} = \boxed{\quad}$$




$$\underline{\quad} - \underline{\quad} = \boxed{\quad}$$

Nombre _____ Fecha _____


- Rodea 10 en cada grupo y suma.



$$10 + 3 = 13$$




$$10 + \underline{\quad} = \square$$




$$10 + \underline{\quad} = \square$$




$$10 + \underline{\quad} = \square$$



$$10 + \underline{\quad} = \square$$



$$10 + \underline{\quad} = \square$$



$$10 + \underline{\quad} = \square$$



$$10 + \underline{\quad} = \square$$

Nombre _____ Fecha _____

• **Suma.**

$5 + 4 = \square$ $7 + 3 = \square$ $4 + 2 = \square$

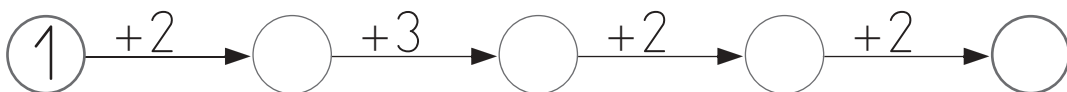
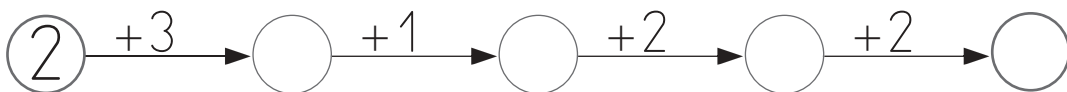
$6 + 2 = \square$ $5 + 2 = \square$ $5 + 1 = \square$

$4 + 3 = \square$ $7 + 1 = \square$ $6 + 4 = \square$

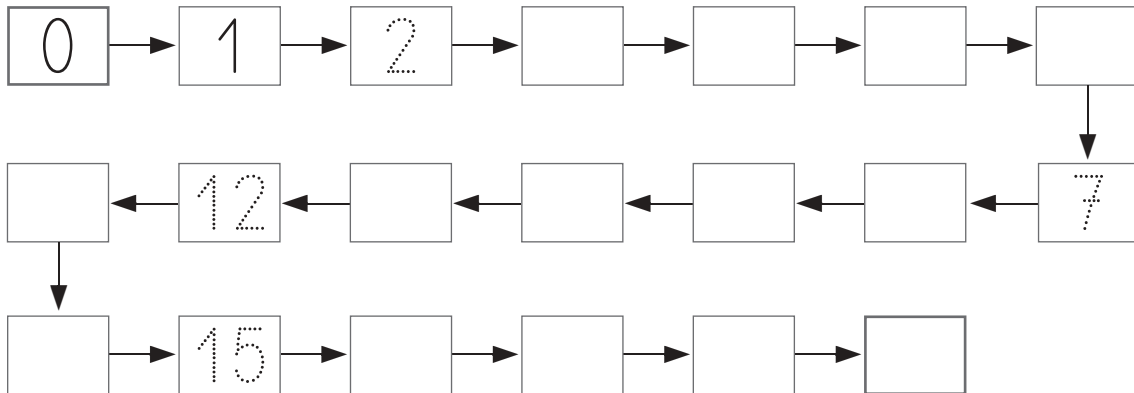
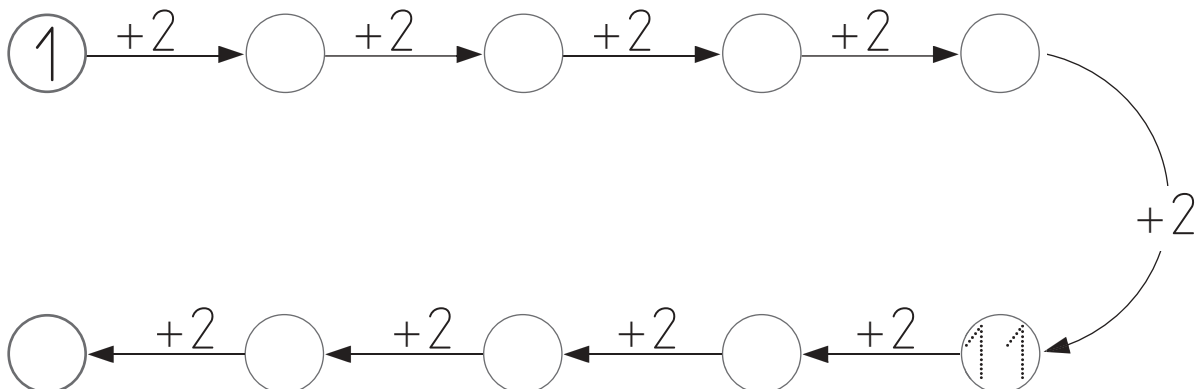
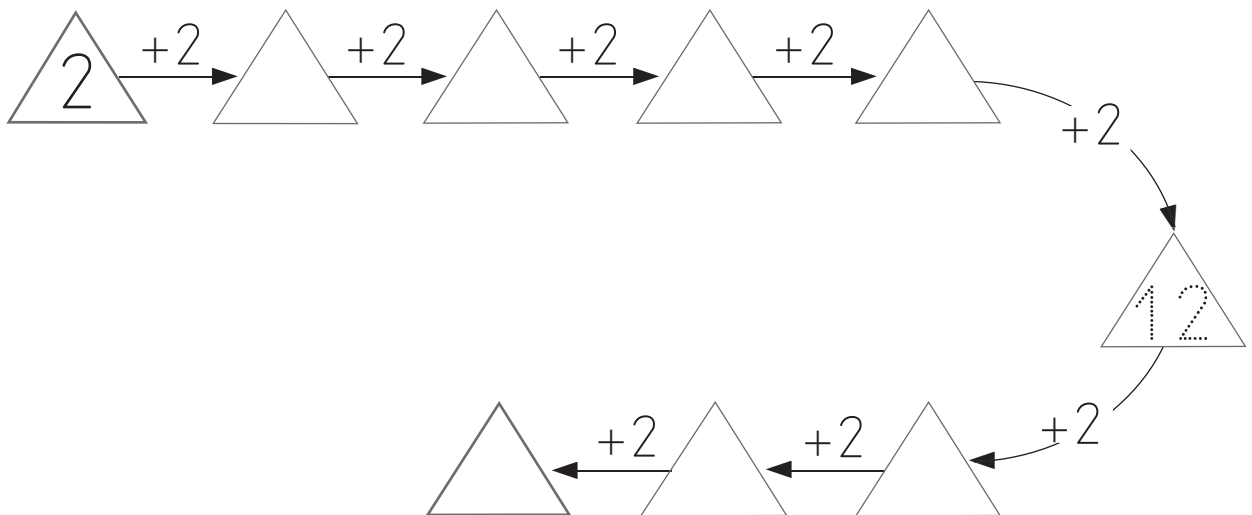
$4 + 1 = \square$ $8 + 2 = \square$ $5 + 0 = \square$

$7 + 2 = \square$ $5 + 3 = \square$ $6 + 1 = \square$

$3 + 0 = \square$ $6 + 3 = \square$ $9 + 1 = \square$

• **Completa.**

Nombre _____ Fecha _____

● **Completa.**● **Suma.**

Nombre _____ Fecha _____

• **Suma.**

$15 + 4 = \square$

$5 + 5 = \square$

$8 + 3 = \square$

$9 + 5 = \square$

$11 + 6 = \square$

$18 + 1 = \square$

$12 + 3 = \square$

$17 + 2 = \square$

$6 + 4 = \square$

$14 + 2 = \square$

$12 + 6 = \square$

$10 + 8 = \square$

$8 + 4 = \square$

$16 + 3 = \square$

$7 + 4 = \square$

$6 + 5 = \square$

$10 + 4 = \square$

$13 + 5 = \square$

$13 + 3 = \square$

$8 + 5 = \square$

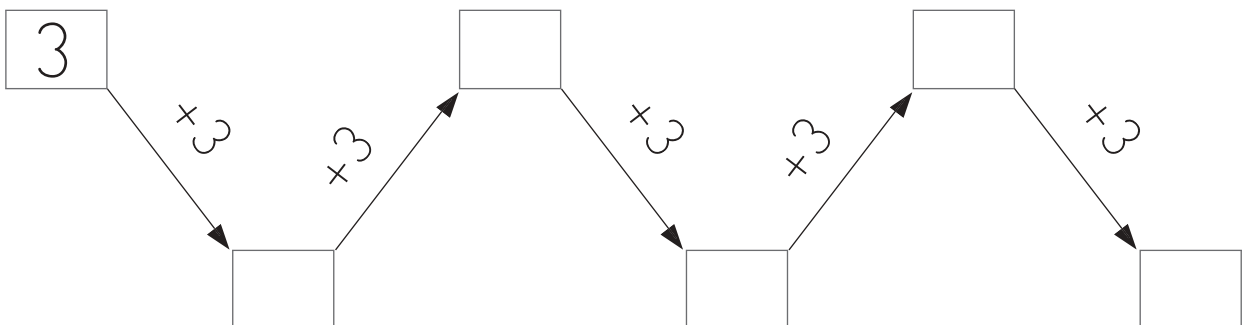
$16 + 1 = \square$

$10 + 5 = \square$

$7 + 6 = \square$

$15 + 2 = \square$

• **Completa.**



Nombre _____ Fecha _____

● **Completa y suma.**

$$4 + 2 + 2 = \square$$

↓ ↓ ↓

$$\boxed{6} + \boxed{2} = \square$$

$$6 + 2 + 3 = \square$$

↓ ↓ ↓

$$\square + \square = \square$$

$$5 + 3 + 4 = \square$$

↓ ↓ ↓

$$\square + \square = \square$$

$$3 + 3 + 5 = \square$$

↓ ↓ ↓

$$\square + \square = \square$$

$$8 + 7 + 4 = \square$$

↓ ↓ ↓

$$\square + \square = \square$$

$$7 + 3 + 4 = \square$$

↓ ↓ ↓

$$\square + \square = \square$$

● **Suma.**

$$5 + 1 + 3 = \square$$

$$5 + 2 + 3 = \square$$

$$6 + 1 + 2 = \square$$

$$4 + 2 + 5 = \square$$

$$4 + 3 + 3 = \square$$

$$9 + 1 + 7 = \square$$

Nombre _____ Fecha _____

• Resta.

$6 - 4$ 1 2 3 4 5 6 7 8 9 $6 - 4 = 2$

$7 - 5$ 1 2 3 4 5 6 7 8 9 $7 - 5 = \square$

$5 - 4$ 1 2 3 4 5 6 7 8 9 $5 - 4 = \square$

$7 - 2$ 1 2 3 4 5 6 7 8 9 $7 - 2 = \square$

$4 - 1$ 1 2 3 4 5 6 7 8 9 $4 - 1 = \square$

$8 - 3$ 1 2 3 4 5 6 7 8 9 $8 - 3 = \square$

$9 - 6$ 1 2 3 4 5 6 7 8 9 $9 - 6 = \square$

$3 - 2$ 1 2 3 4 5 6 7 8 9 $3 - 2 = \square$

$6 - 3$ 1 2 3 4 5 6 7 8 9 $6 - 3 = \square$

Nombre _____ Fecha _____

- Cuenta y completa las restas.

$$15 - 6 = \boxed{9}$$

1	2	3	4	5	6	7	8	9	10	11	12	13	14	15	16	17	18	19
---	---	---	---	---	---	--------------	--------------	--------------	---------------	---------------	---------------	---------------	---------------	---------------	----	----	----	----

$$11 - 5 = \boxed{}$$

1	2	3	4	5	6	7	8	9	10	11	12	13	14	15	16	17	18	19
---	---	---	---	---	---	---	---	---	----	----	----	----	----	----	----	----	----	----

$$13 - 8 = \boxed{}$$

1	2	3	4	5	6	7	8	9	10	11	12	13	14	15	16	17	18	19
---	---	---	---	---	---	---	---	---	----	----	----	----	----	----	----	----	----	----

$$14 - 7 = \boxed{}$$

1	2	3	4	5	6	7	8	9	10	11	12	13	14	15	16	17	18	19
---	---	---	---	---	---	---	---	---	----	----	----	----	----	----	----	----	----	----

$$12 - 8 = \boxed{}$$

1	2	3	4	5	6	7	8	9	10	11	12	13	14	15	16	17	18	19
---	---	---	---	---	---	---	---	---	----	----	----	----	----	----	----	----	----	----

$$19 - 12 = \boxed{}$$

1	2	3	4	5	6	7	8	9	10	11	12	13	14	15	16	17	18	19
---	---	---	---	---	---	---	---	---	----	----	----	----	----	----	----	----	----	----

Nombre _____ Fecha _____

• **Completa.**

0 *cerro*

1 *uno*

2 *dos*

3 _____

4 _____

5 _____

6 _____

7 _____

8 _____

9 _____

10 _____

11 _____

12 _____

13 _____

14 _____

15 _____

16 _____

17 _____

18 _____

19 _____

• **Une.**

Quince

Ocho

Once

Dieciséis

11

15

16

8

Nombre _____ Fecha _____

● Completa.

10 *diez* _____

60 _____

20 *veinte* _____

70 _____

30 _____

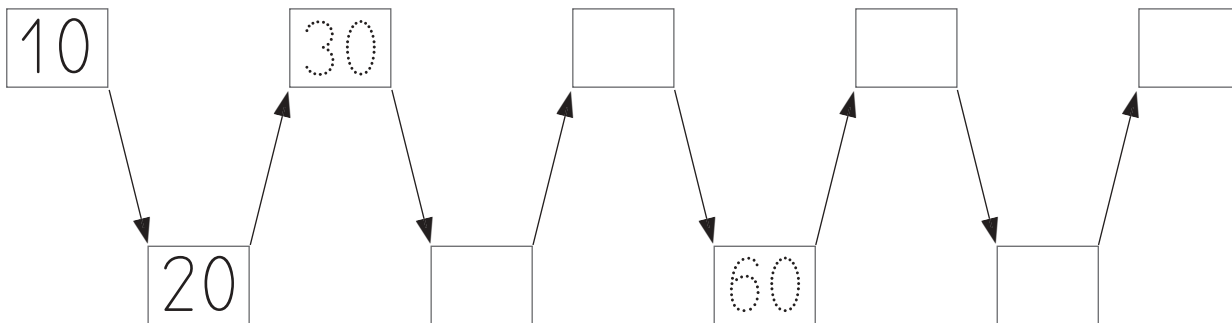
80 _____

40 _____

90 _____

50 _____

● Completa.



● Une.

<i>veinte</i>	<i>cuarenta</i>	<i>sesenta</i>	<i>setenta</i>
---------------	-----------------	----------------	----------------

60

70

10

20

50

40

30

80

Nombre _____ Fecha _____

● **Suma.**

$20 + 30 = \square$

$30 + 10 = \square$

$50 + 30 = \square$

$50 + 20 = \square$

$40 + 40 = \square$

$60 + 30 = \square$

$20 + 40 = \square$

$30 + 40 = \square$

$30 + 30 = \square$

$70 + 20 = \square$

● **Resta.**

$60 - 10 = \square$

$70 - 40 = \square$

$30 - 20 = \square$

$20 - 10 = \square$

$50 - 20 = \square$

$90 - 60 = \square$

$60 - 30 = \square$

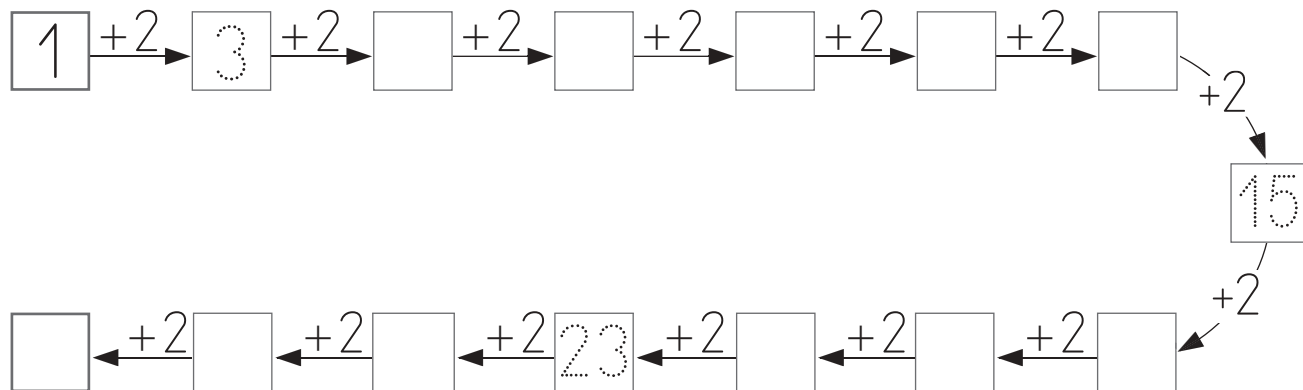
$40 - 20 = \square$

$80 - 50 = \square$

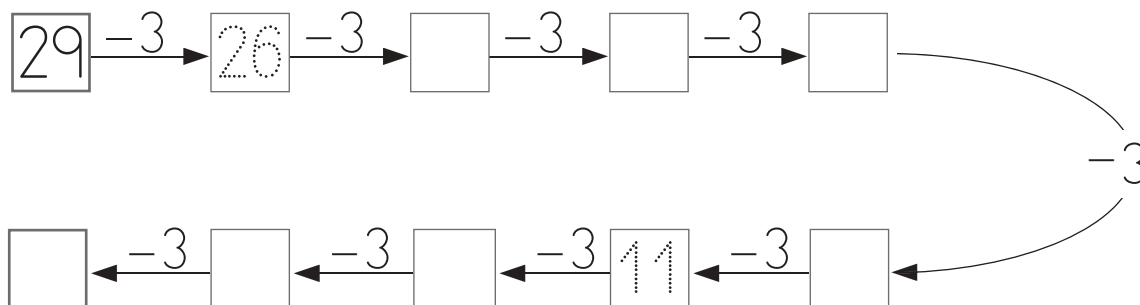
$70 - 60 = \square$

Nombre _____ Fecha _____

● **Completa.**



● **Completa.**



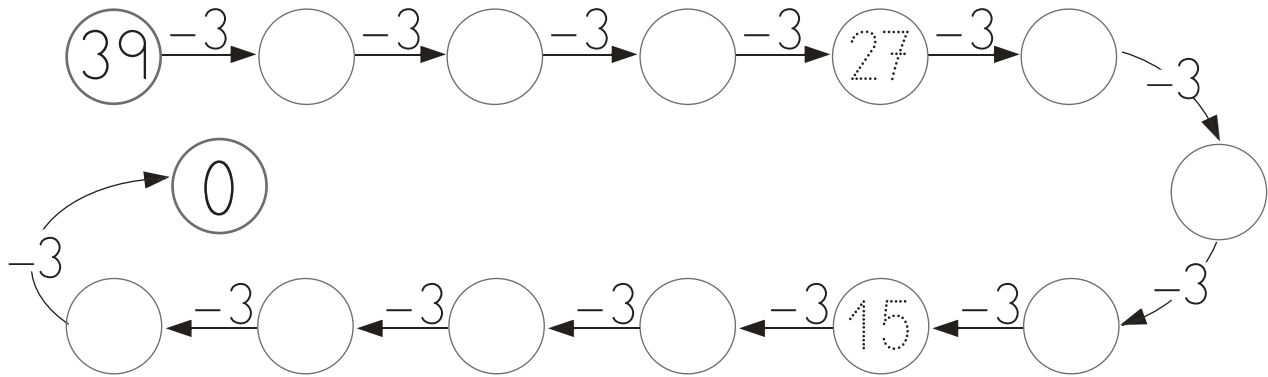
● **Completa.**

Decenas	Unidades	=	Decenas	Unidades
1	7	=	17	
2	3	=	<input type="text"/>	<input type="text"/>
2	8	=	<input type="text"/>	<input type="text"/>
1	4	=	<input type="text"/>	<input type="text"/>

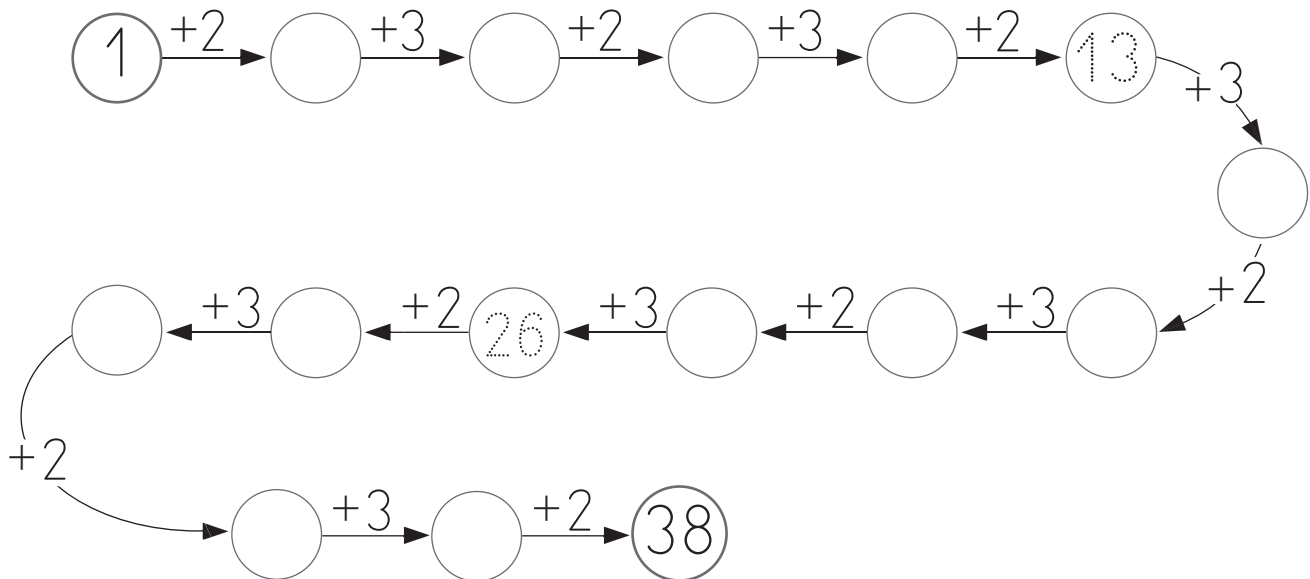
26	=	<u> 2 </u>	<u> 6 </u>
12	=	<u> </u>	<u> </u>
21	=	<u> </u>	<u> </u>
20	=	<u> </u>	<u> </u>

Nombre _____ Fecha _____

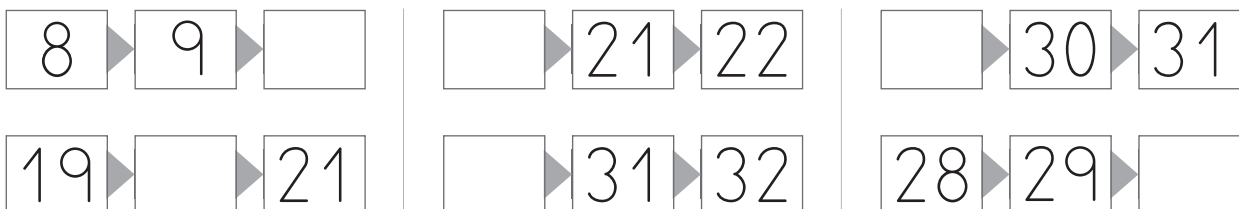
• **Completa.**



• **Completa.**



• **Escribe el número que falta.**



Nombre _____

Fecha _____

● **Escribe.**20 *veinte*

30 _____

21 *veintiuno*

31 _____

22 _____

32 _____

23 _____

33 _____

24 _____

34 _____

25 _____

35 _____

26 _____

36 _____

27 _____

37 _____

28 _____

38 _____

29 _____

39 _____

Nombre _____ Fecha _____

• **Suma.**

$$\begin{array}{r} 15 \\ + 4 \\ \hline \square \end{array}$$

$$\begin{array}{r} 33 \\ + 5 \\ \hline \square \end{array}$$

$$\begin{array}{r} 12 \\ + 6 \\ \hline \square \end{array}$$

$$\begin{array}{r} 26 \\ + 3 \\ \hline \square \end{array}$$

$$\begin{array}{r} 14 \\ + 2 \\ \hline \square \end{array}$$

$$\begin{array}{r} 1 \\ + 28 \\ \hline \square \end{array}$$

$$\begin{array}{r} 4 \\ + 10 \\ \hline \square \end{array}$$

$$\begin{array}{r} 3 \\ + 34 \\ \hline \square \end{array}$$

$$\begin{array}{r} 6 \\ + 11 \\ \hline \square \end{array}$$

$$\begin{array}{r} 5 \\ + 22 \\ \hline \square \end{array}$$

$$\begin{array}{r} 21 \\ + 13 \\ \hline \square \end{array}$$

$$\begin{array}{r} 16 \\ + 13 \\ \hline \square \end{array}$$

$$\begin{array}{r} 34 \\ + 4 \\ \hline \square \end{array}$$

$$\begin{array}{r} 13 \\ + 22 \\ \hline \square \end{array}$$

$$\begin{array}{r} 25 \\ + 12 \\ \hline \square \end{array}$$

$$\begin{array}{r} 31 \\ + 4 \\ \hline \square \end{array}$$

$$\begin{array}{r} 22 \\ + 16 \\ \hline \square \end{array}$$

$$\begin{array}{r} 15 \\ + 11 \\ \hline \square \end{array}$$

$$\begin{array}{r} 28 \\ + 11 \\ \hline \square \end{array}$$

$$\begin{array}{r} 37 \\ + 2 \\ \hline \square \end{array}$$

$$\begin{array}{r} 11 \\ + 20 \\ \hline \square \end{array}$$

$$\begin{array}{r} 32 \\ + 6 \\ \hline \square \end{array}$$

$$\begin{array}{r} 20 \\ + 17 \\ \hline \square \end{array}$$

$$\begin{array}{r} 23 \\ + 3 \\ \hline \square \end{array}$$

$$\begin{array}{r} 17 \\ + 21 \\ \hline \square \end{array}$$

Nombre _____ Fecha _____

● **Completa.**

	Decenas	Unidades		Decenas	Unidades
56	→ 5	6		6	0 → <input type="text"/>
40	→			1	1 → <input type="text"/>
2	→			0	9 → <input type="text"/>
28	→			5	9 → <input type="text"/>
37	→			6	7 → <input type="text"/>

● **Suma 2 cada vez.**

2	→	<input type="text"/>	→	<input type="text"/>	→	<input type="text"/>	→	<input type="text"/>	→	<input type="text"/>	→	<input type="text"/>	→	<input type="text"/>	→	<input type="text"/>	→	<input type="text"/>	→	18
36	←	<input type="text"/>	←	<input type="text"/>	←	<input type="text"/>	←	<input type="text"/>	←	<input type="text"/>	←	<input type="text"/>	←	<input type="text"/>	←	<input type="text"/>	←	<input type="text"/>	←	20
38	→	<input type="text"/>	→	<input type="text"/>	→	<input type="text"/>	→	<input type="text"/>	→	<input type="text"/>	→	<input type="text"/>	→	<input type="text"/>	→	<input type="text"/>	→	<input type="text"/>	→	54
68	←	<input type="text"/>	←	<input type="text"/>	←	<input type="text"/>	←	<input type="text"/>	←	<input type="text"/>	←	<input type="text"/>	←	<input type="text"/>	←	<input type="text"/>	←	<input type="text"/>	←	56

● **Suma 2 cada vez.**

1	→	3	→	5	→	<input type="text"/>	→	<input type="text"/>	→	<input type="text"/>	→	<input type="text"/>	→	<input type="text"/>	→	<input type="text"/>	→	<input type="text"/>	→	<input type="text"/>
35	←	<input type="text"/>	←	<input type="text"/>	←	<input type="text"/>	←	<input type="text"/>	←	<input type="text"/>	←	<input type="text"/>	←	<input type="text"/>	←	<input type="text"/>	←	<input type="text"/>	←	19
37	→	<input type="text"/>	→	<input type="text"/>	→	<input type="text"/>	→	<input type="text"/>	→	<input type="text"/>	→	<input type="text"/>	→	<input type="text"/>	→	<input type="text"/>	→	<input type="text"/>	→	<input type="text"/>

Nombre _____ Fecha _____

• **Escribe.**

40 *cuarenta*

50 _____

41 _____

51 _____

42 _____

52 _____

43 _____

53 _____

44 _____

54 _____

45 _____

55 _____

46 _____

56 _____

47 _____

57 _____

48 _____

58 _____

49 _____

59 _____

Nombre _____ Fecha _____

● Resta.

$$\begin{array}{r} 49 \\ - 3 \\ \hline \square \end{array}$$

$$\begin{array}{r} 55 \\ - 34 \\ \hline \square \end{array}$$

$$\begin{array}{r} 65 \\ - 14 \\ \hline \square \end{array}$$

$$\begin{array}{r} 59 \\ - 5 \\ \hline \square \end{array}$$

$$\begin{array}{r} 68 \\ - 23 \\ \hline \square \end{array}$$

$$\begin{array}{r} 47 \\ - 23 \\ \hline \square \end{array}$$

$$\begin{array}{r} 65 \\ - 31 \\ \hline \square \end{array}$$

$$\begin{array}{r} 63 \\ - 60 \\ \hline \square \end{array}$$

$$\begin{array}{r} 37 \\ - 26 \\ \hline \square \end{array}$$

$$\begin{array}{r} 23 \\ - 12 \\ \hline \square \end{array}$$

$$\begin{array}{r} 35 \\ - 15 \\ \hline \square \end{array}$$

$$\begin{array}{r} 48 \\ - 26 \\ \hline \square \end{array}$$

$$\begin{array}{r} 67 \\ - 45 \\ \hline \square \end{array}$$

$$\begin{array}{r} 47 \\ - 2 \\ \hline \square \end{array}$$

$$\begin{array}{r} 59 \\ - 33 \\ \hline \square \end{array}$$

$$\begin{array}{r} 67 \\ - 40 \\ \hline \square \end{array}$$

$$\begin{array}{r} 68 \\ - 50 \\ \hline \square \end{array}$$

$$\begin{array}{r} 17 \\ - 15 \\ \hline \square \end{array}$$

$$\begin{array}{r} 38 \\ - 7 \\ \hline \square \end{array}$$

$$\begin{array}{r} 44 \\ - 23 \\ \hline \square \end{array}$$

$$\begin{array}{r} 52 \\ - 41 \\ \hline \square \end{array}$$

$$\begin{array}{r} 24 \\ - 12 \\ \hline \square \end{array}$$

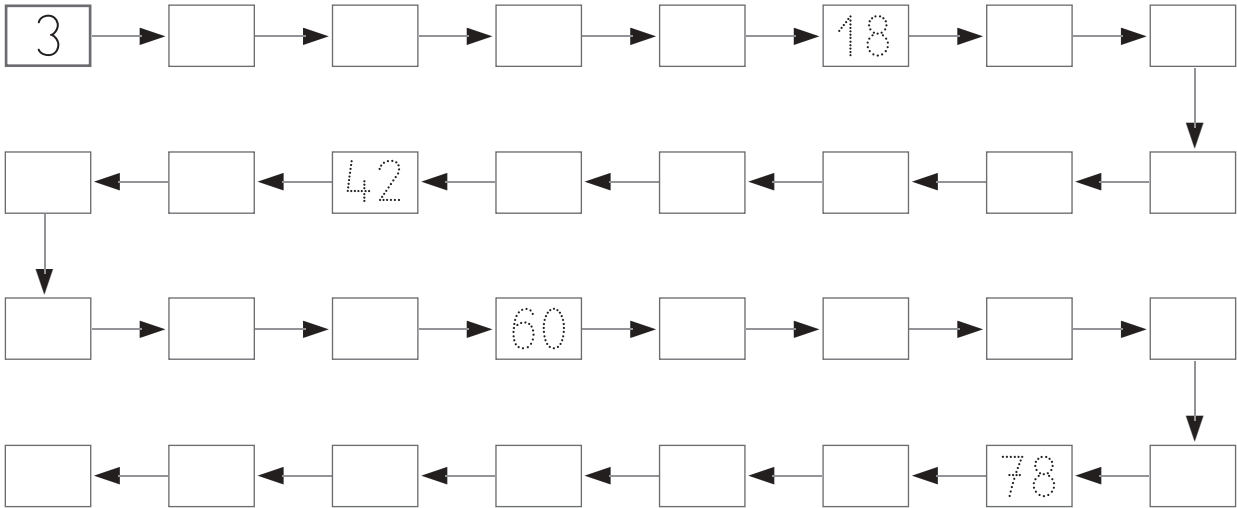
$$\begin{array}{r} 56 \\ - 25 \\ \hline \square \end{array}$$

$$\begin{array}{r} 36 \\ - 10 \\ \hline \square \end{array}$$

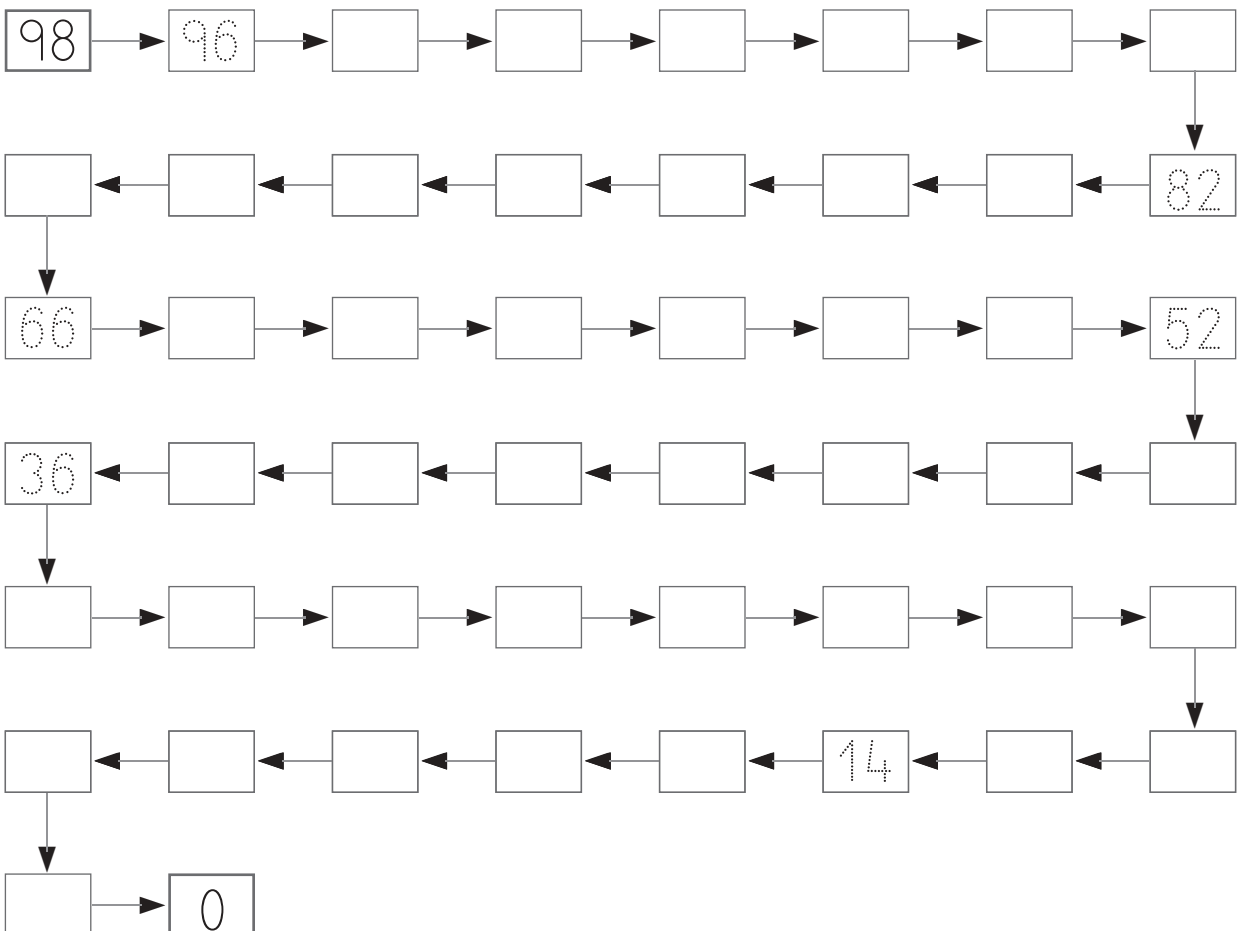
$$\begin{array}{r} 63 \\ - 51 \\ \hline \square \end{array}$$

Nombre _____ Fecha _____

● **Suma 3 cada vez.**



● **Resta 2 cada vez.**



Nombre _____ Fecha _____

● **Escribe.**70 *setenta*

80 _____

71 *setenta y uno*

81 _____

72 _____

82 _____

73 _____

83 _____

74 _____

84 _____

75 _____

85 _____

76 _____

86 _____

77 _____

87 _____

78 _____

88 _____

79 _____

89 _____

Nombre _____ Fecha _____

• **Escribe.**

90 *noventa*

95 _____

91 _____

96 _____

92 _____

97 _____

93 _____

98 _____

94 _____

99 _____

• **Escribe.**

15 _____

35 _____

20 _____

40 _____

21 _____

61 _____

26 _____

76 _____

28 _____

88 _____

Nombre _____ Fecha _____

● **Calcula.**

$$\begin{array}{r} 30 \\ + 13 \\ \hline \square \end{array}$$

$$\begin{array}{r} 52 \\ + 34 \\ \hline \square \end{array}$$

$$\begin{array}{r} 64 \\ + 25 \\ \hline \square \end{array}$$

$$\begin{array}{r} 21 \\ + 33 \\ \hline \square \end{array}$$

$$\begin{array}{r} 72 \\ + 7 \\ \hline \square \end{array}$$

$$\begin{array}{r} 53 \\ - 21 \\ \hline \square \end{array}$$

$$\begin{array}{r} 19 \\ - 6 \\ \hline \square \end{array}$$

$$\begin{array}{r} 58 \\ - 16 \\ \hline \square \end{array}$$

$$\begin{array}{r} 75 \\ - 73 \\ \hline \square \end{array}$$

$$\begin{array}{r} 82 \\ - 61 \\ \hline \square \end{array}$$

$$\begin{array}{r} 95 \\ - 52 \\ \hline \square \end{array}$$

$$\begin{array}{r} 64 \\ - 62 \\ \hline \square \end{array}$$

$$\begin{array}{r} 42 \\ + 47 \\ \hline \square \end{array}$$

$$\begin{array}{r} 40 \\ - 10 \\ \hline \square \end{array}$$

$$\begin{array}{r} 43 \\ + 56 \\ \hline \square \end{array}$$

$$\begin{array}{r} 66 \\ + 30 \\ \hline \square \end{array}$$

$$\begin{array}{r} 49 \\ - 21 \\ \hline \square \end{array}$$

$$\begin{array}{r} 73 \\ + 4 \\ \hline \square \end{array}$$

$$\begin{array}{r} 60 \\ + 20 \\ \hline \square \end{array}$$

$$\begin{array}{r} 79 \\ - 64 \\ \hline \square \end{array}$$

$$\begin{array}{r} 90 \\ - 70 \\ \hline \square \end{array}$$

$$\begin{array}{r} 52 \\ + 27 \\ \hline \square \end{array}$$

$$\begin{array}{r} 97 \\ - 62 \\ \hline \square \end{array}$$

$$\begin{array}{r} 23 \\ + 45 \\ \hline \square \end{array}$$

$$\begin{array}{r} 89 \\ - 32 \\ \hline \square \end{array}$$

Nombre _____

Fecha _____

● **Escribe > o <.**

$42 \bigcirc 18$

$39 \bigcirc 34$

$81 \bigcirc 78$

$52 \bigcirc 67$

$42 \bigcirc 93$

$15 \bigcirc 17$

$60 \bigcirc 25$

$69 \bigcirc 72$

$81 \bigcirc 18$

● **Ordena de menor a mayor.**

43 44
47 49

___ < ___ < ___ < ___

76 78
86 80

___ < ___ < ___ < ___

● **Ordena de mayor a menor.**

49 51
54 45

___ > ___ > ___ > ___

50 41
24 36

___ > ___ > ___ > ___

Nombre _____ Fecha _____

● Suma.

$$\begin{array}{r} 33 \\ 12 \\ + 4 \\ \hline \square \end{array}$$

$$\begin{array}{r} 16 \\ 40 \\ + 2 \\ \hline \square \end{array}$$

$$\begin{array}{r} 62 \\ 6 \\ + 11 \\ \hline \square \end{array}$$

$$\begin{array}{r} 5 \\ 21 \\ + 70 \\ \hline \square \end{array}$$

$$\begin{array}{r} 24 \\ 12 \\ + 3 \\ \hline \square \end{array}$$

$$\begin{array}{r} 24 \\ 13 \\ + 51 \\ \hline \square \end{array}$$

$$\begin{array}{r} 65 \\ 11 \\ + 21 \\ \hline \square \end{array}$$

$$\begin{array}{r} 13 \\ 41 \\ + 31 \\ \hline \square \end{array}$$

$$\begin{array}{r} 6 \\ 52 \\ + 20 \\ \hline \square \end{array}$$

$$\begin{array}{r} 22 \\ 32 \\ + 42 \\ \hline \square \end{array}$$

$$\begin{array}{r} 32 \\ 42 \\ + 24 \\ \hline \square \end{array}$$

$$\begin{array}{r} 43 \\ 13 \\ + 23 \\ \hline \square \end{array}$$

$$\begin{array}{r} 32 \\ 61 \\ + 5 \\ \hline \square \end{array}$$

$$\begin{array}{r} 24 \\ 21 \\ + 42 \\ \hline \square \end{array}$$

$$\begin{array}{r} 24 \\ 30 \\ + 41 \\ \hline \square \end{array}$$

$$\begin{array}{r} 52 \\ 15 \\ + 22 \\ \hline \square \end{array}$$

$$\begin{array}{r} 70 \\ 10 \\ + 19 \\ \hline \square \end{array}$$

$$\begin{array}{r} 12 \\ 20 \\ + 13 \\ \hline \square \end{array}$$

$$\begin{array}{r} 83 \\ 2 \\ + 12 \\ \hline \square \end{array}$$

$$\begin{array}{r} 27 \\ 11 \\ + 60 \\ \hline \square \end{array}$$

Nombre _____ Fecha _____

• Suma.

$\begin{array}{r} 58 \\ + 9 \\ \hline \square \end{array}$	$\begin{array}{r} 32 \\ + 9 \\ \hline \square \end{array}$	$\begin{array}{r} 26 \\ + 7 \\ \hline \square \end{array}$	$\begin{array}{r} 29 \\ + 6 \\ \hline \square \end{array}$	$\begin{array}{r} 38 \\ + 5 \\ \hline \square \end{array}$
--	--	--	--	--

$\begin{array}{r} 25 \\ + 5 \\ \hline \square \end{array}$	$\begin{array}{r} 43 \\ + 19 \\ \hline \square \end{array}$	$\begin{array}{r} 26 \\ + 25 \\ \hline \square \end{array}$	$\begin{array}{r} 47 \\ + 5 \\ \hline \square \end{array}$	$\begin{array}{r} 55 \\ + 16 \\ \hline \square \end{array}$
--	---	---	--	---

$\begin{array}{r} 29 \\ + 11 \\ \hline \square \end{array}$	$\begin{array}{r} 74 \\ + 18 \\ \hline \square \end{array}$	$\begin{array}{r} 28 \\ + 25 \\ \hline \square \end{array}$	$\begin{array}{r} 39 \\ + 25 \\ \hline \square \end{array}$	$\begin{array}{r} 46 \\ + 16 \\ \hline \square \end{array}$
---	---	---	---	---

$\begin{array}{r} 67 \\ + 29 \\ \hline \square \end{array}$	$\begin{array}{r} 38 \\ + 38 \\ \hline \square \end{array}$	$\begin{array}{r} 49 \\ + 32 \\ \hline \square \end{array}$	$\begin{array}{r} 42 \\ + 39 \\ \hline \square \end{array}$	$\begin{array}{r} 57 \\ + 38 \\ \hline \square \end{array}$
---	---	---	---	---

$\begin{array}{r} 36 \\ + 48 \\ \hline \square \end{array}$	$\begin{array}{r} 24 \\ + 57 \\ \hline \square \end{array}$	$\begin{array}{r} 38 \\ + 39 \\ \hline \square \end{array}$	$\begin{array}{r} 24 \\ + 46 \\ \hline \square \end{array}$	$\begin{array}{r} 19 \\ + 41 \\ \hline \square \end{array}$
---	---	---	---	---

Nombre _____ Fecha _____

● **Suma.**

$\begin{array}{r} 26 \\ + 4 \\ \hline \square \end{array}$	$\begin{array}{r} 38 \\ + 2 \\ \hline \square \end{array}$	$\begin{array}{r} 42 \\ + 5 \\ \hline \square \end{array}$	$\begin{array}{r} 52 \\ + 5 \\ \hline \square \end{array}$	$\begin{array}{r} 54 \\ + 3 \\ \hline \square \end{array}$
--	--	--	--	--

$\begin{array}{r} 16 \\ + 4 \\ \hline \square \end{array}$	$\begin{array}{r} 24 \\ + 6 \\ \hline \square \end{array}$	$\begin{array}{r} 23 \\ + 4 \\ \hline \square \end{array}$	$\begin{array}{r} 22 \\ + 5 \\ \hline \square \end{array}$	$\begin{array}{r} 44 \\ + 8 \\ \hline \square \end{array}$
--	--	--	--	--

$\begin{array}{r} 25 \\ + 25 \\ \hline \square \end{array}$	$\begin{array}{r} 50 \\ + 27 \\ \hline \square \end{array}$	$\begin{array}{r} 37 \\ + 49 \\ \hline \square \end{array}$	$\begin{array}{r} 58 \\ + 14 \\ \hline \square \end{array}$	$\begin{array}{r} 22 \\ + 23 \\ \hline \square \end{array}$
---	---	---	---	---

$\begin{array}{r} 53 \\ + 16 \\ \hline \square \end{array}$	$\begin{array}{r} 37 \\ + 20 \\ \hline \square \end{array}$	$\begin{array}{r} 31 \\ + 10 \\ \hline \square \end{array}$	$\begin{array}{r} 32 \\ + 14 \\ \hline \square \end{array}$	$\begin{array}{r} 14 \\ + 28 \\ \hline \square \end{array}$
---	---	---	---	---

$\begin{array}{r} 35 \\ + 19 \\ \hline \square \end{array}$	$\begin{array}{r} 36 \\ + 19 \\ \hline \square \end{array}$	$\begin{array}{r} 6 \\ + 18 \\ \hline \square \end{array}$	$\begin{array}{r} 9 \\ + 21 \\ \hline \square \end{array}$	$\begin{array}{r} 41 \\ + 9 \\ \hline \square \end{array}$
---	---	--	--	--

Nombre _____ Fecha _____

• **Suma.**

$$\begin{array}{r} 25 \\ + 65 \\ \hline \square \end{array}$$

$$\begin{array}{r} 29 \\ + 46 \\ \hline \square \end{array}$$

$$\begin{array}{r} 20 \\ + 53 \\ \hline \square \end{array}$$

$$\begin{array}{r} 42 \\ + 28 \\ \hline \square \end{array}$$

$$\begin{array}{r} 15 \\ + 38 \\ \hline \square \end{array}$$

• **Resta.**

$$\begin{array}{r} 79 \\ - 59 \\ \hline \square \end{array}$$

$$\begin{array}{r} 38 \\ - 23 \\ \hline \square \end{array}$$

$$\begin{array}{r} 97 \\ - 66 \\ \hline \square \end{array}$$

$$\begin{array}{r} 86 \\ - 52 \\ \hline \square \end{array}$$

$$\begin{array}{r} 48 \\ - 24 \\ \hline \square \end{array}$$

• **Calcula.**

$$\begin{array}{r} 89 \\ - 48 \\ \hline \square \end{array}$$

$$\begin{array}{r} 36 \\ + 49 \\ \hline \square \end{array}$$

$$\begin{array}{r} 39 \\ - 18 \\ \hline \square \end{array}$$

$$\begin{array}{r} 73 \\ - 22 \\ \hline \square \end{array}$$

$$\begin{array}{r} 26 \\ + 7 \\ \hline \square \end{array}$$

$$\begin{array}{r} 64 \\ + 18 \\ \hline \square \end{array}$$

$$\begin{array}{r} 64 \\ - 13 \\ \hline \square \end{array}$$

$$\begin{array}{r} 35 \\ + 56 \\ \hline \square \end{array}$$

$$\begin{array}{r} 94 \\ - 50 \\ \hline \square \end{array}$$

$$\begin{array}{r} 49 \\ + 49 \\ \hline \square \end{array}$$