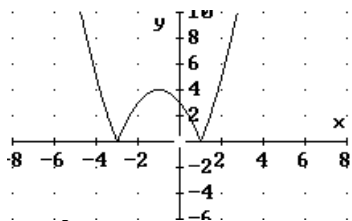
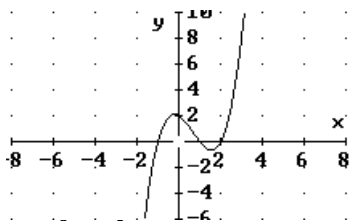


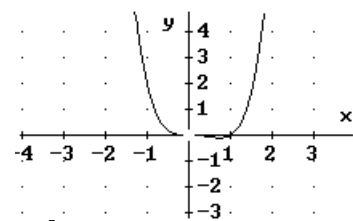
Representar gráficamente las siguientes funciones, de las que se da la solución:



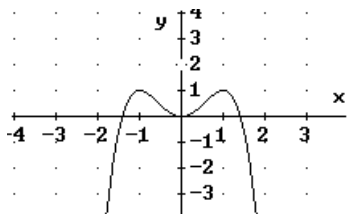
$$y = |x^2 + 2x - 3|$$



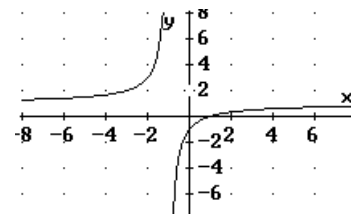
$$y = x^3 - 2x^2 - x + 2$$



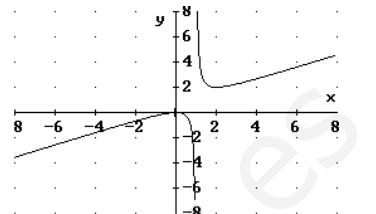
$$y = x^3(x-1)$$



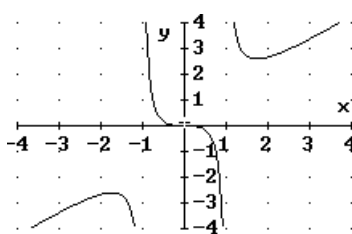
$$y = -x^4 + 2x^2$$



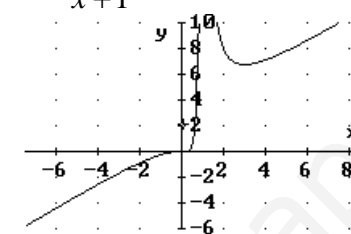
$$y = \frac{x-1}{x+1}$$



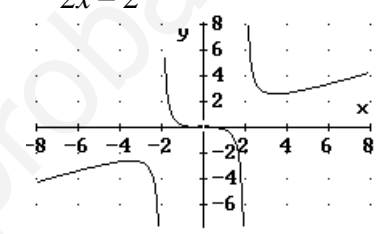
$$y = \frac{x^2}{2x-2}$$



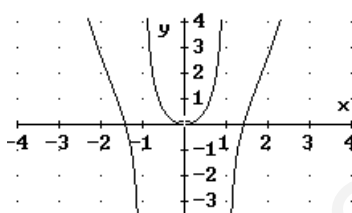
$$y = \frac{x^3}{x^2-1}$$



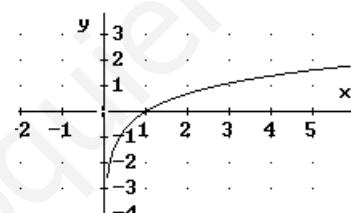
$$y = \frac{x^3}{(x-1)^2}$$



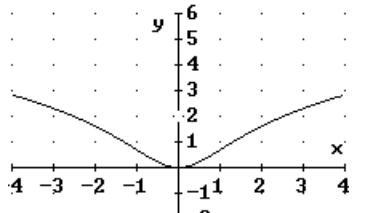
$$y = \frac{x^3}{2x^2-8}$$



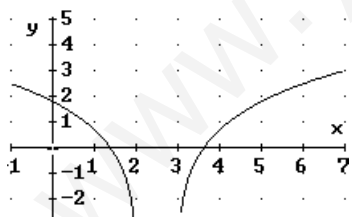
$$y = \frac{x^4 - 2x^2}{x^2 - 1}$$



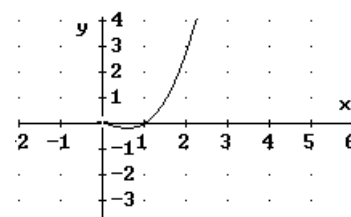
$$y = \ln x$$



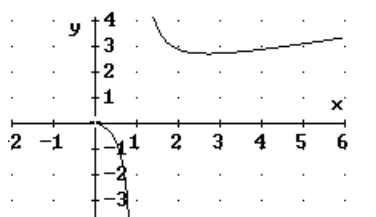
$$y = \ln(x^2 + 1)$$



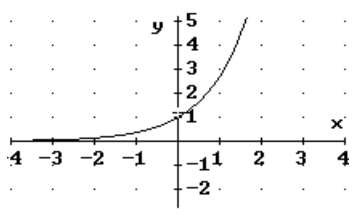
$$y = \ln(x^2 - 5x + 6)$$



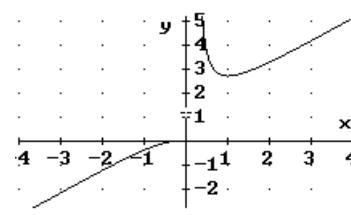
$$y = \begin{cases} x^2 \ln x, & x \neq 0 \\ 0, & x = 0 \end{cases}$$



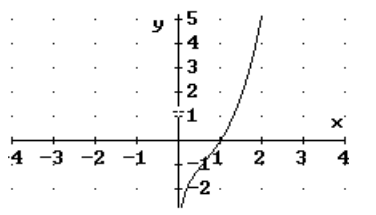
$$y = \begin{cases} \frac{x}{\ln x}, & x \neq 0 \\ 0, & x = 0 \end{cases}$$



$$y = e^x$$



$$y = x e^{1/x}$$



$$y = e^x \ln x$$